

11. 내림이 없고 나머지가 있는 (몇십몇) ÷ (몇)

[01 ~ 09] 계산해 보세요.

01

$$5 \overline{) 26}$$

02

$$8 \overline{) 37}$$

03

$$6 \overline{) 44}$$

04

$$7 \overline{) 67}$$

05

$$4 \overline{) 25}$$

06

$$5 \overline{) 48}$$

07

$$9 \overline{) 85}$$

08

$$8 \overline{) 74}$$

09

$$7 \overline{) 51}$$

[10 ~ 13] 빈칸에 알맞은 수를 써넣으세요.

10 $37 \div 4 = \square \dots \square$

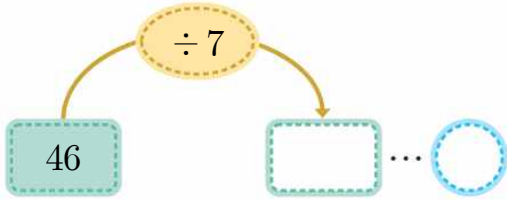
11 $20 \div 3 = \square \dots \square$

12 $53 \div 6 = \square \dots \square$

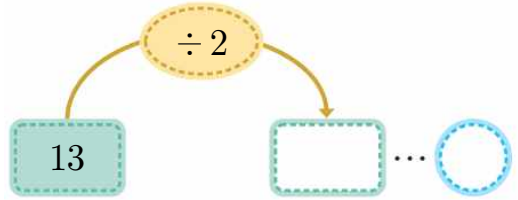
13 $43 \div 8 = \square \dots \square$

[14 ~ 17] 나눗셈을 하여 안에는 몫을 안에는 나머지를 써넣으세요.

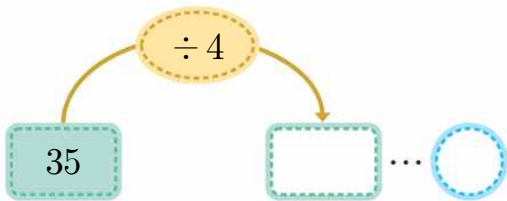
14



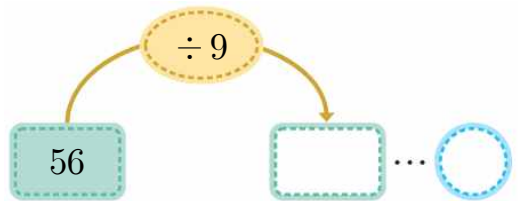
15



16



17



18 나머지가 가장 큰 것을 찾아 ○표 하세요.

$39 \div 5$

()

$23 \div 3$

()

$45 \div 7$

()

19 나머지가 4가 될 수 없는 식을 찾아 ○표 하세요.

$\div 6$

()

$\div 4$

()

$\div 7$

()

[01 ~ 09] 계산해 보세요.

01 $5 \overline{)26} \begin{array}{l} 5 \dots 1 \\ \underline{5} \\ 26 \end{array}$

02 $8 \overline{)37} \begin{array}{l} 4 \dots 5 \\ \underline{32} \\ 37 \end{array}$

03 $6 \overline{)44} \begin{array}{l} 7 \dots 2 \\ \underline{42} \\ 44 \end{array}$

04 $7 \overline{)67} \begin{array}{l} 9 \dots 4 \\ \underline{63} \\ 67 \end{array}$

05 $4 \overline{)25} \begin{array}{l} 6 \dots 1 \\ \underline{24} \\ 25 \end{array}$

06 $5 \overline{)48} \begin{array}{l} 9 \dots 3 \\ \underline{45} \\ 48 \end{array}$

07 $9 \overline{)85} \begin{array}{l} 9 \dots 4 \\ \underline{81} \\ 85 \end{array}$

08 $8 \overline{)74} \begin{array}{l} 9 \dots 2 \\ \underline{72} \\ 74 \end{array}$

09 $7 \overline{)51} \begin{array}{l} 7 \dots 2 \\ \underline{49} \\ 51 \end{array}$

[10 ~ 13] 빈칸에 알맞은 수를 써넣으세요.

10 $37 \div 4 = \boxed{9} \dots \boxed{1}$

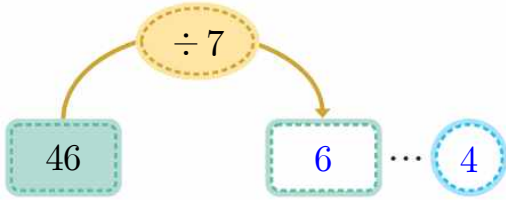
11 $20 \div 3 = \boxed{6} \dots \boxed{2}$

12 $53 \div 6 = \boxed{8} \dots \boxed{5}$

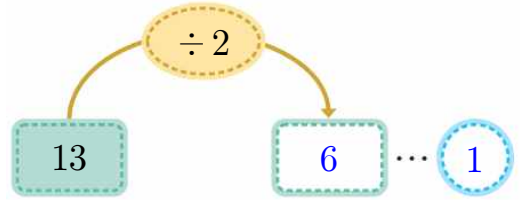
13 $43 \div 8 = \boxed{5} \dots \boxed{3}$

[14 ~ 17] 나눗셈을 하여 안에는 몫을 안에는 나머지를 써넣으세요.

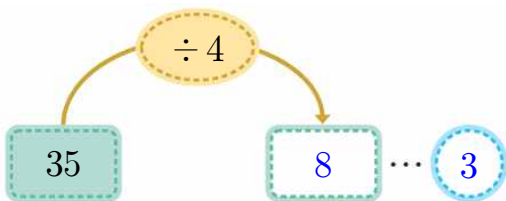
14



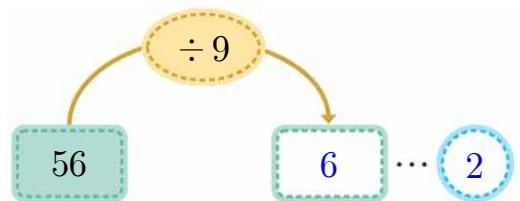
15



16



17



18 나머지가 가장 큰 것을 찾아 ○표 하세요.

$$39 \div 5$$

$$(\quad \bigcirc \quad) \\ = 7 \cdots 4$$

$$23 \div 3$$

$$(\quad \quad) \\ = 7 \cdots 2$$

$$45 \div 7$$

$$(\quad \quad) \\ = 6 \cdots 3$$

19 나머지가 4가 될 수 없는 식을 찾아 ○표 하세요.

$$\square \div 6$$

$$(\quad \quad)$$

$$\square \div 4$$

$$(\quad \bigcirc \quad)$$

$$\square \div 7$$

$$(\quad \quad)$$